

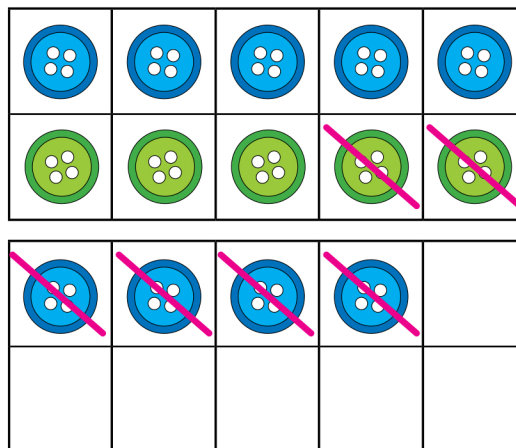
Реши примеры с помощью пуговиц в рамках

1. $14 - 6 = \underline{8}$




$14 - \underline{4} = 10$

$10 - \underline{2} = \underline{8}$

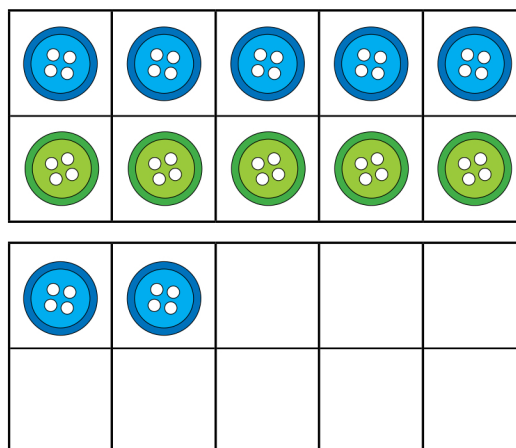


2. $12 - 4 = \underline{\quad}$




$12 - \underline{\quad} = 10$

$10 - \underline{\quad} = \underline{\quad}$



3. $16 - 10 = \underline{\quad}$



$16 - \underline{\quad} = 10$

$10 - \underline{\quad} = \underline{\quad}$

